

Nama


Tanggal

# Pengurangan


Hitunglah ada berapa apel yang tidak dicoret?



$5 - 2 = \underline{\hspace{2cm}}$




$3 - 2 = \underline{\hspace{2cm}}$



$4 - 1 = \underline{\hspace{2cm}}$



$3 - 1 = \underline{\hspace{2cm}}$



$5 - 1 = \underline{\hspace{2cm}}$

