


PENJUMLAHAN


Selesaikan operasi penjumlahan di bawah ini. Gunting dan tempelkanlah jawaban yang benar pada kotak jawaban!




1




2




3




+




=



+



=



+



=



+



=



2

3

5

4

