



PENJUMLAHAN


Selesaikan operasi penjumlahan di bawah ini. Gunting dan tempelkanlah jawaban yang benar pada kotak jawaban!




1




2




3



+




=




+



=



+



=



+



=



4

2

3

6

