



# Pengurangan

Kerjakan soal berikut seperti contoh




$$4 - 1 = 3$$



$$4 - 2 =$$



$$3 - 2 =$$



$$5 - 2 =$$



$$5 - 4 =$$



$$2 - 1 =$$