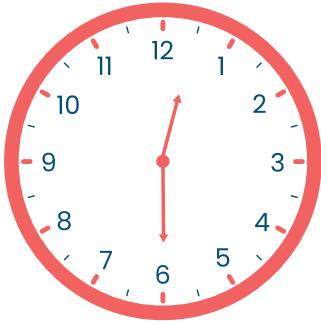


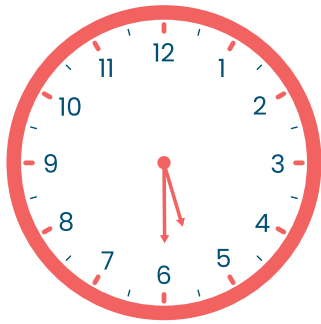


# Pengukuran WAKTU

Tentukan waktu yang ditunjukkan oleh gambar jam berikut!




Pukul \_\_\_\_\_



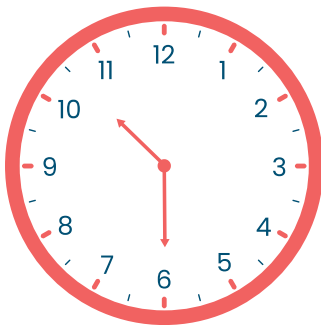
Pukul \_\_\_\_\_



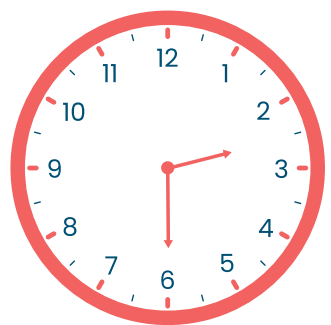
Pukul \_\_\_\_\_




Pukul \_\_\_\_\_



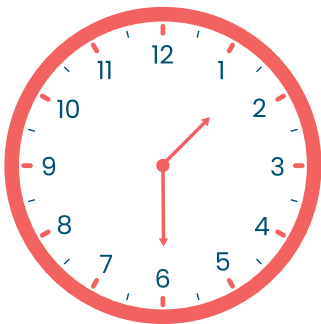
Pukul \_\_\_\_\_



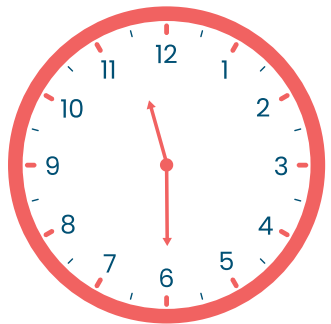
Pukul \_\_\_\_\_



Pukul \_\_\_\_\_



Pukul \_\_\_\_\_



Pukul \_\_\_\_\_